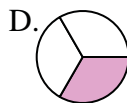
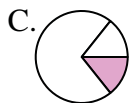
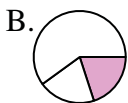
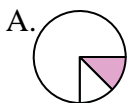
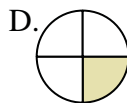
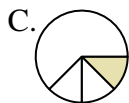
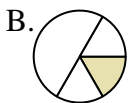
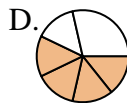
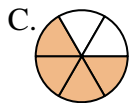
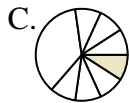
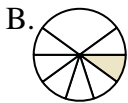
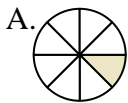
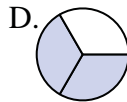
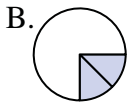
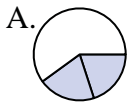
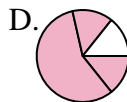
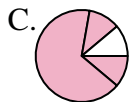
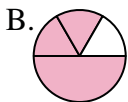
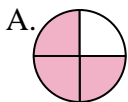
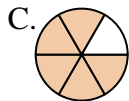
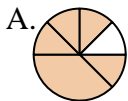
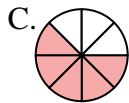
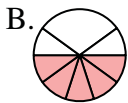
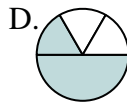
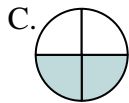
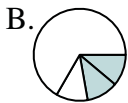
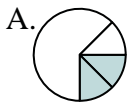
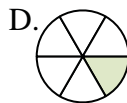
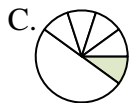
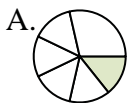
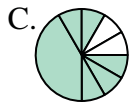


**Determine which letter best represents each fraction.****Answers**1) Which choice best shows $\frac{1}{3}$?2) Which choice best shows $\frac{1}{4}$?3) Which choice best shows $\frac{4}{6}$?4) Which choice best shows $\frac{1}{8}$?5) Which choice best shows $\frac{2}{3}$?6) Which choice best shows $\frac{3}{4}$?7) Which choice best shows $\frac{5}{6}$?8) Which choice best shows $\frac{5}{8}$?9) Which choice best shows $\frac{2}{4}$?10) Which choice best shows $\frac{1}{6}$?11) Which choice best shows $\frac{6}{8}$?12) Which choice best shows $\frac{3}{6}$?

1. _____

2. _____

3. _____

4. _____

5. _____

6. _____

7. _____

8. _____

9. _____

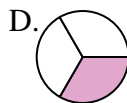
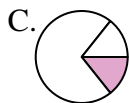
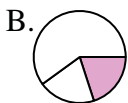
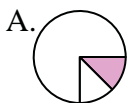
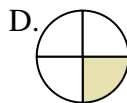
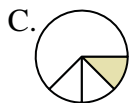
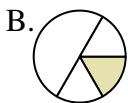
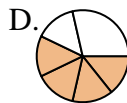
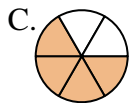
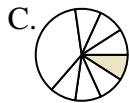
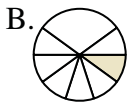
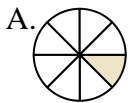
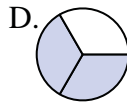
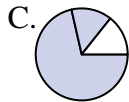
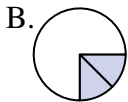
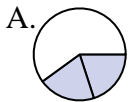
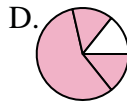
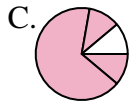
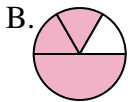
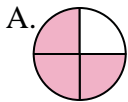
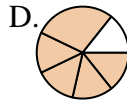
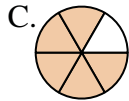
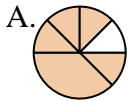
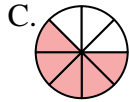
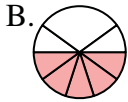
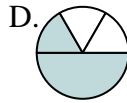
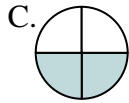
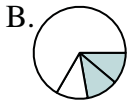
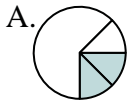
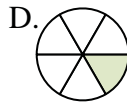
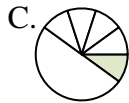
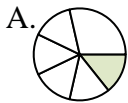
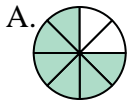
10. _____

11. _____

12. _____



Determine which letter best represents each fraction.

Answers1) Which choice best shows $\frac{1}{3}$?1. **D**2) Which choice best shows $\frac{1}{4}$?2. **D**3) Which choice best shows $\frac{4}{6}$?3. **C**4) Which choice best shows $\frac{1}{8}$?5. **D**5) Which choice best shows $\frac{2}{3}$?6. **A**6) Which choice best shows $\frac{3}{4}$?7. **C**7) Which choice best shows $\frac{5}{6}$?8. **C**8) Which choice best shows $\frac{5}{8}$?9. **C**9) Which choice best shows $\frac{2}{4}$?10. **D**10) Which choice best shows $\frac{1}{6}$?11. **A**11) Which choice best shows $\frac{6}{8}$?12. **D**12) Which choice best shows $\frac{3}{6}$?